



POLE STAR PUBLIC SCHOOL

Sector-7 (Extn.) Gurugram (HR.)

SUMMER HOLIDAY'S HOMEWORK

SESSION: 2025-2026

CLASS – IV



This summer let's do something different and amazing! Let's spend quality time with our family members in a fun filled way.

Engage yourself in fun filled activities

Read story books- Try to read some interesting story from books and learn new words from a story. Eg. Panchratna, Fairy Tales.

Play indoor Games- Engage yourself in lots of indoor games/activities

Inculcate Manners- Remember to say Please, Thank You, Sorry and Excuse Me

Care and concern- Use this time to take care of your parents or grandparents and listen to stories from them

Note : Do assignments in the respective subject register.

Do activities of all the subjects in project file.

ENGLISH

ASSIGNMENT

I. Read the passage carefully and answer the following questions.

One day a hungry lion was looking for the food in the forest. He saw a rabbit and thought, "This will be my lunch!" But the rabbit was very clever. He said to the lion, "oh great lion I am not only your lunch". another lion in the forest also wants to eat me!" The lion was very angry. "take me to him!" he roared. The Rabbit took the lion to well and said, "he lives in there." the lion look inside and saw his reflection . He thought it was another him and jumped in to fight. But he fell into a well and could not get out. The clever rabbit ran away happily.

- a) Why was lion looking for food?
- b) What did the rabbit say to trick the lion?
- c) What did the lion see in the well?
- d) Find a word from the passage that means 'smart and quick thinking'.
- e) Give a title to the story?

II. Worksheet-Circle the common nouns and underline the proper nouns in the following sentence.

- a) Ravi went to the market with his mother.
- b) India is a beautiful country.
- c) The dog barked at Rita.
- d) We visited the Taj Mahal during our holiday.
- e) Amit and his sister are playing with a ball.
- f) The teacher gave Neha a gold star.
- g) Mr. Sharma lives in Delhi.
- h) I have a cat named Whiskers.
- i) The students are going to the library.
- j) The Ganga is a holy river in India

III. worksheet –write the opposite gender of the following nouns

NOUN GENDER			
Masculine Gender A noun that denotes a male person or animal is said to be of the masculine gender.		Feminine Gender A noun that denotes a female person or animal is said to be of the feminine gender.	
Write the feminine gender for the following masculine gender.			
author	_____	nephew	_____
actor	_____	host	_____
poet	_____	master	_____
shepherd	_____	governor	_____
czar	_____	prophet	_____
duke	_____	hunter	_____
landlord	_____	lord	_____
Write the masculine gender for the following feminine gender.			
_____	queen	_____	wife
_____	bride	_____	mare
_____	mother	_____	aunt
_____	bee	_____	heroine
_____	countess	_____	tigress
_____	cow-calf	_____	goose
_____	heiress	_____	doe
_____	vixen	_____	giantess

ACTIVITY

THEME : GOOD HEALTH AND WELL BEING



Mary Kom



Sakshi Malik

Write about two sports personalities of Manipur and Haryana

- Name
- Sports
- Achievements
- Awards

हिंदी

अधिन्यास

1. अपठित गद्यांश को पढ़कर पूछे गए प्रश्नों के उत्तर दीजिए:

एक गाँव में रामू नाम का एक किसान रहता था। वह बहुत ही मेहनती और ईमानदार था। हर रोज़ वह अपने खेतों में काम करता और फसलें उगाता। गाँव के लोग उसकी बहुत इज़्ज़त करते थे क्योंकि वह दूसरों की मदद करने में कभी पीछे नहीं हटता था। एक बार गाँव में बहुत तेज़ बारिश हुई जिससे नदियाँ उफान पर आ गईं। गाँव के कई घर पानी में डूब गए। रामू ने बिना डरे कई , लोगों को सुरक्षित स्थानों तक पहुँचाया। उसकी बहादुरी के लिए गाँव के प्रधान ने उसे सम्मानित किया

(क) रामू का पेशा क्या था?

(i) शिक्षक

(ii) दुकानदार

(iii) किसान

(iv) सिपाही

(ख) गाँव के लोग रामू की क्यों इज़्ज़त करते थे?

(i) क्योंकि वह अमीर था

(ii) क्योंकि वह बहुत पढ़ा-लिखा था

(iii) क्योंकि वह दूसरों की मदद करता था

(iv) क्योंकि वह गाँव का प्रधान था

(ग) गाँव में क्या आपदा आई थी?

(i) सूखा

(ii) बर्फबारी

(iii) आँधी

(iv) बाढ़

(घ) बारिश के कारण कौन-सी चीज़ उफान पर आ गई थी?

(ङ) रामू को किसने सम्मानित किया?

2. रिक्त स्थानों की पूर्ति कीजिए।

(क) भाषा की सबसे छोटी ध्वनि----- है।

(ख) व्यंजनों का उच्चारण----- की सहायता से होता है।

(ग) वर्णों के व्यवस्थित रूप को----- कहते हैं।

(घ) स्वर----- की कोई मात्रा नहीं होती।






(ङ) ----- मात्र वर्ण से पहले बाई और लगती है।

3. चित्र देखकर पांच पंक्तियां लिखिए।



4. कार्यपत्रक पूरा कीजिए।

वचन

एकवचन		बहुवचन	
	तितली		
	तोता		
	चूहा		
	लड़की		
	बिल्ली		
	गिलहरी		

परियोजना कार्य

हरियाणा और मणिपुर का एक - एक पौष्टिक आहार का चित्र सहित वर्णन पांच वाक्यों में करते हुए परियोजना तैयार कीजिए।

MATHS
ASSIGNMENT

1. Write the number names of the following numbers.

(a) 5,72,896 _____

(b) 8,60,189 _____

2. Write the face value and place value of underline digit.

(a) 6,87,564 _____

(b) 3,58,310 _____

3. Write the numbers in ascending and descending order.

42167, 21864, 3798, 8721, 59250, 916, 85

4. Form the smallest and the greatest 6-digit numbers using the given digits, the digit cannot be repeated. 5,1,3,4,7,8 _____

5. The Roman number for the number 589 is _____.

6. The Hindu Arabic number for CMLVIII _____.

7. Add the following numbers.

(a) $3630 + 2025 + 3596$ (b) $43705 + 24682$ and 15246

8. Subtract the following numbers.

(a) $6143 - 3156$ (b) 379563 from 734251

9. Solve : $583694 - 432015 + 389524$

10. Using the properties of addition fill in the blanks .

(a) $4603 + 2112 = \underline{\hspace{2cm}} + 4603$

(c) $89037 - 0 = \underline{\hspace{2cm}}$

(b) $\underline{\hspace{2cm}} + 2067 = 2067$

(d) $0 + 3295 = \underline{\hspace{2cm}}$

11. Estimate the sum by rounding to the nearest ten thousand.

(a) $50674 + 26725 \underline{\hspace{2cm}}$

(b) $33729 + 41946 \underline{\hspace{2cm}}$

12. Estimate the difference by rounding to the nearest thousand.

(a) $7256 - 3508 \underline{\hspace{2cm}}$

(b) $8047 - 2539 \underline{\hspace{2cm}}$

13. The monthly salary of Satendra is ₹ 96,207 and that of Sanjay is ₹ 1,18,234. Whose monthly salary is more and how much?

14. The cost of a flat is ₹ 20575 more than a car. If the cost of the car is ₹ 220575, find total cost of the flat and the car.

15. Fill in the missing digits:

(a)

	3	0	5	<input type="text"/>
	5	6	<input type="text"/>	0
+	<input type="text"/>	2	0	2
<hr/>				
	9	<input type="text"/>	6	9
<hr/>				

(b)

	3	4	5	2	<input type="text"/>
	1	2	<input type="text"/>	2	3
-	<hr/>				
	<input type="text"/>	1	9	0	1
<hr/>					

ACTIVITY

THEME : GOOD HEALTH AND WELL BEING

- Find and write the population of Haryana and Manipur. Which state has more population and How much?
- Draw a bar graph showing population of Haryana and Manipur year 2020 to 2025.
- Paste traditional cuisine of Haryana and Manipur.
- Learn tables 2 to 20.

SCIENCE
ASSIGNMENT

I. Fill in the blanks.

- a) Plants make their food by the process of _____.
- b) Animals reproduce to continue their _____.
- c) Plants that grow in deserts are called _____ plants.
- d) Birds lay _____ to reproduce.
- e) The baby grows inside the _____ in mammals.

II. True or False

- a) All plants grow in the same habitat. ()
- b) Seeds need water, air, and warmth to germinate. ()
- c) Lions give birth to babies. ()
- d) Water lilies grow in desert areas. ()
- e) Leaves are called the food factory of the plant. ()

III. Give Two Examples of Each.

- a) Aquatic plants: _____, _____
- b) Animals that lay eggs: _____, _____
- c) Animals that give birth to young ones: _____, _____
- d) Terrestrial plants: _____, _____
- e) Reptiles: _____, _____

IV. Unscramble the Words.

- | | |
|-----------------------|------------------|
| a) PONRTOAYHS _____ | b) SLTNAAP _____ |
| c) GTMRAINAIOEN _____ | d) HAMLMS _____ |
| e) UKCDE _____ | |

V. Answer the following questions

- a) What are green plants also called and why?
- b) What is photosynthesis?
- c) What are aquatic plants? Give one example.
- d) How do birds reproduce?
- e) Name two animals that lay eggs.

ACTIVITY

THEME : GOOD HEALTH AND WELL BEING

Make a Health Journal for 1 Week:

Maintain a record for 7 days of the following:

- Hours of sleep
- Fruits and vegetables eaten
- Time spent on physical activity (like cycling, running, or yoga)
- Amount of water consumed

Instructions:

- Draw a table for each day.
- At the end, write 5 sentences on how good habits keep you healthy.
- Decorate your journal with drawings or photos from magazines / Newspaper.

SOCIAL SCIENCE ASSIGNMENT

Q1. Write 5 lines on Himalayas.

Q2. Paste the pictures of mountaineers. Write 3 lines on each.

a) Edmund Hilary b) Tenzing Norgay c) Bachendri pal d) Santosh Yadav

Q3. Explain the term kangri, phiran, kahwa, glacier, dhazu, Boku.

Q4. Write the capital of following states.

a) Jammu and Kashmir b) Himachal Pradesh c) Uttarakhand d) Arunachal Pradesh
e) Manipur f) Meghalaya g) Mizoram h) Assam i) Tripura h) Ladakh

Q5. Write high peaks of Himalayas.

Q6. Name Himalayan rivers.

Q7. Important tribes of Sikkim.

ACTIVITY

THEME : GOOD HEALTH AND WELL BEING

Make Brochure

- Tourist places of Haryana and Manipur
- Practice Yoga during summer break
- Choose any one yoga pose which you like most and prepare write up.
- Name of the Assana
- Steps to perform the Assana
- Benefits the Assana
- Paste your picture in that Assana

COMPUTER ASSIGNMENT

I. Choose the correct word from the help box and fill in the blanks.

Operating System ,	Aero shake,	Personalize
--------------------	-------------	-------------

- a) Microsoft Windows is an _____.
- b) To customize the desktop, right-click on the blank area and select the _____ option.
- c) _____ feature minimizes all the open windows except the one you want to focus on.

II. Answer the following in one word.

- a) The feature that allows you to access your computer by showing your face, finger prints or iris. _____.
- b) This feature of windows takes you directly to the desktop. _____.
- c) This feature of Windows 10 provides a bundle of updated apps. _____.
- d) This icon allows you to access the shared files or drives on different computers in a Network environment. _____.
- e) This feature allows you to drag and drop a window to a corner of the screen to make space for other applications. _____.
- f) Founder of Microsoft _____.

III. State True and False.

- a) Windows 16 is the latest version of Windows. _____
- b) You cannot resize a live tile. _____
- c) The Peek button is located at the right end of the taskbar. _____
- d) List the names of versions of Windows.
- e) Write any four features of Windows 10 that have made it popular.
- f) List the names commonly used icons in Windows.
- g) List the names universal apps in Windows.

IV. Write the Keyboard shortcuts.

- a) Search Option b) Open File Explorer window

ACTIVITY

THEME : GOOD HEALTH AND WELL BEING

- Collect the information on “healthy habits” (e.g. exercise, balanced diet, hygiene). Write in MS –Word and take a printout. (One page and paste in project file)
- Match the machine with what it helps measure or track:

Machine	What it does (Output)
1. Thermometer	A. Counts heartbeats
2. Fitness tracker watch	B. Measures body temperature
3. Weighing scale	C. Shows body weight

DRAWING

Page No. 11,16,21 colour in your art book.

ACTIVITY

Butterfly (Page No-28) do in your art book.

PHYSICAL EDUCATION

UNIT -1 CHAPTER - 1

TOPIC : THROWING & CATCHING

- Write their steps
- How to play
- Benefits of Throwing & Catching

Link: https://epathshala.nic.in/wp-content/doc/book/flipbook/Class%20III/0339-Khel_yoga/ceky101

UNIT- 3 CHAPTER -7

TOPIC : YOGA

Write the steps to perform any 1 yoga from the following

- Vrikshasana (Roll No 1 to 10)
- Bhujangasana (Roll No 11 to 20)
- Sukhasana (Roll No 21 to 27)

Also write any 3 benefits

Click photo while performing & paste in project file.

Link : https://epathshala.nic.in/wp-content/doc/book/flipbook/Class%20III/0339-Khel_yoga/ceky107

